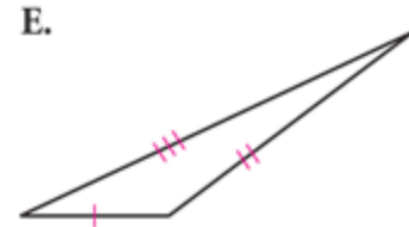
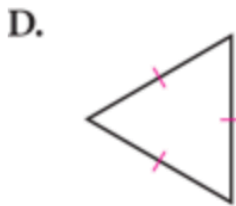
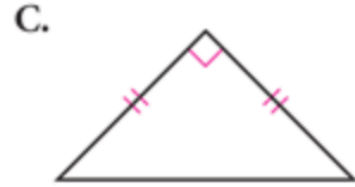
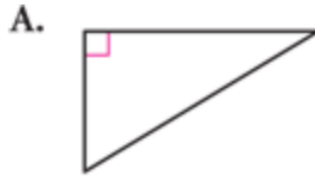


Geometry HW 9/20, due Friday 9/23

Reviewing Triangle Vocabulary

For Exercises 1–4, match the term on the left with its figure on the right.

1. Equilateral triangle
2. Scalene right triangle
3. Isosceles right triangle
4. Isosceles obtuse triangle



5. Draw an isosceles triangle and label the vertex angle, the base angles, and the base.

6. Name the 3 pairs of corresponding congruent sides and 3 pairs of corresponding congruent angles in the figure below. Then fill in the blank with the correct name of the triangle.

$\triangle EAR \cong \triangle \underline{\quad} ?$ h

