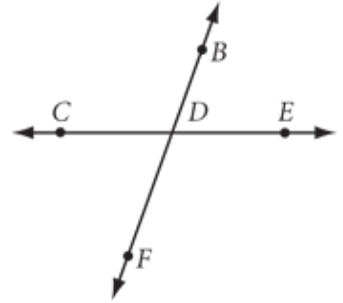
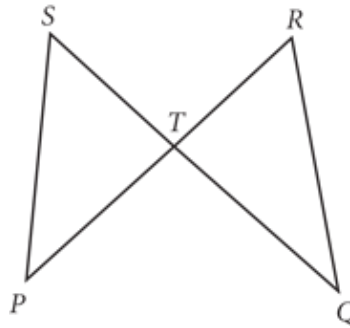


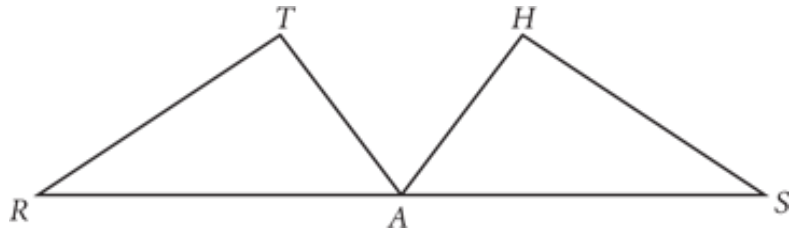
***HW due tomorrow, 8/11/16**

1. For each figure at right, list the angles that you can name using only the vertex letter.

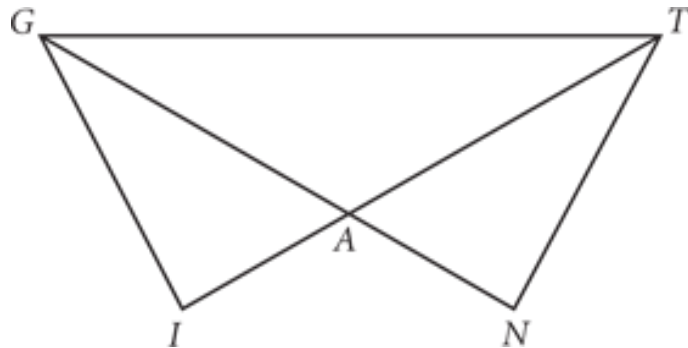


For 2-3, copy each figure and mark it with all the given information.

2. $RA = SA$
 $m\angle T = m\angle H$
 $RT = SH$

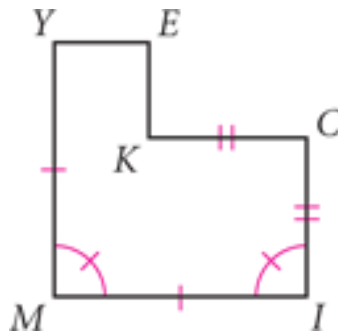


3. $AT = AG$
 $AI = AN$
 $\angle AGT \cong \angle ATG$
 $GI = TN$



For 4-5, write down what you know from the markings.

4. $MI = ?$
 $IC = ?$
 $m\angle M = ?$



5. $\angle MEO \cong ?$
 $\angle SUE \cong ?$
 $OU \cong ?$

